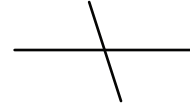

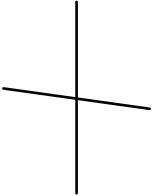
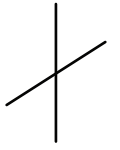
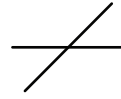
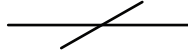
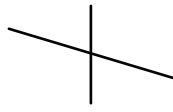
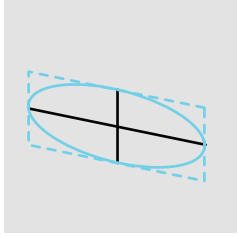


## ASSIGNMENT 2: CUBOIDS & ELLIPSOIDS

## 1. Draw a rotated ellipse



## 2. Draw the intermediate form

